

# WELCOME TO THE BEST SUBJECT:



**Ormiston  
RIVERS  
Academy**

Name: TEACHERS COPY

Answers in bold or highlighted



# United Kingdom

## Physical and Human Geography

**Question 1: What is the total population of the United Kingdom?**

- a) 55 million      b) 48 million      c) 66 million      d) 71 million

**Question 2: The UK has the longest country name in the world?**

- a) TRUE      b) FALSE

**Question 3: Can you identify Scotland, England and Ireland?**



**1**



**2**



**3**

- a) 1 is Scotland, 2 is Ireland, 3 is England      b) 1 is Ireland, 2 is Scotland, 3 is England  
c) 1 is England, 2 is Scotland, 3 is Ireland      d) 1 is Scotland, 2 is England, 3 is Ireland x

**Question 3: How many counties are in England?**

- a) 75      b) 48      c) 62      d) 43

**Question 4: Who is the current (2020) Prime Minister?**

- a) Boris Johnson      b) Margaret Thatcher      c) Tony Blair      d) Theresa May

**Question 5: What percentage of the UK population is made up of 0-15 year old?**

- a) 4%      b) 24%      c) 18%      d) 16%

**Question 6: Which of these animals are NOT native to the UK?**

- a) Grey seal      b) Water deer      c) Natterjack toad      d) Maned wolf

**Question 7: What is the Capital city of Scotland?**

- a) Haggis      b) Edinburgh      c) Kiltown      d) Baginpipe

**Question 8: What is the Capital city of Ireland?**

- a) Dublin      b) Belfast      c) Guinness      d) Cork

**Question 9: What is the Capital city of England?**

- a) Bristol      b) Buckingham      b) London      b) Oxford

**Question 10: How old is Queen Elizabeth II as of 2020?**



- a) 97      b) 99      b) 94      b) 101







# Flags of the world

## Europe

	<ul style="list-style-type: none"> <li>a) Austria</li> <li>b) Belgium</li> <li>c) <b>Germany</b></li> <li>d) Poland</li> </ul>		<ul style="list-style-type: none"> <li>a) <b>Spain</b></li> <li>b) Portugal</li> <li>c) China</li> <li>d) Mongolia</li> </ul>
---	--	--	---

	<ul style="list-style-type: none"> <li>a) Italy</li> <li>b) Russia</li> <li>c) <b>France</b></li> <li>d) India</li> </ul>		<ul style="list-style-type: none"> <li>a) Mexico</li> <li>b) Brazil</li> <li>c) <b>Portugal</b></li> <li>d) Holland</li> </ul>
--	---	---	--

	<ul style="list-style-type: none"> <li>a) Algeria</li> <li>b) Monaco</li> <li>c) Sweden</li> <li>d) <b>Austria</b></li> </ul>		<ul style="list-style-type: none"> <li>a) Indonesia</li> <li>b) <b>Sweden</b></li> <li>c) France</li> <li>d) Egypt</li> </ul>
---	---	--	---

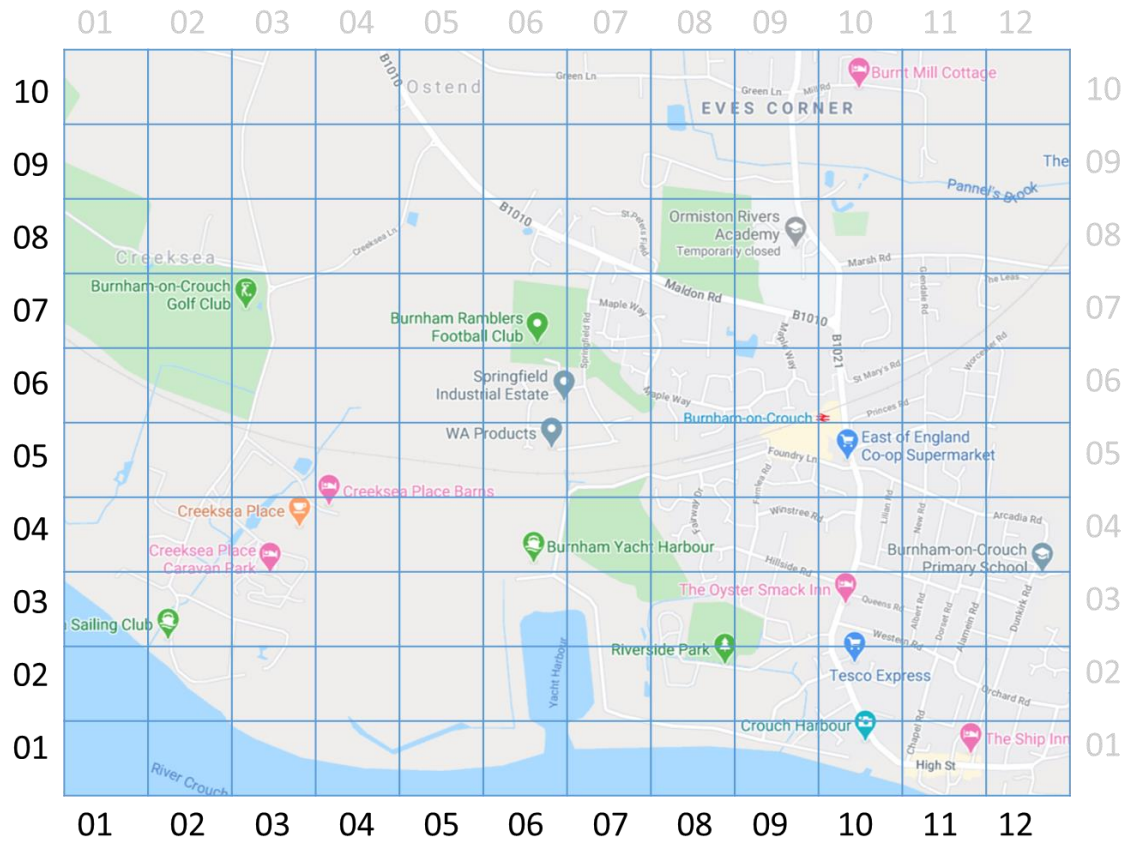
	<ul style="list-style-type: none"> <li>a) <b>Russia</b></li> <li>b) Canada</li> <li>c) Spain</li> <li>d) Belgium</li> </ul>		<ul style="list-style-type: none"> <li>a) <b>Poland</b></li> <li>b) Bolivia</li> <li>c) Romania</li> <li>d) Greece</li> </ul>
---	---	--	---

	<ul style="list-style-type: none"> <li>a) Nepal</li> <li>b) Croatia</li> <li>c) <b>Finland</b></li> <li>d) Jamaica</li> </ul>		<ul style="list-style-type: none"> <li>a) Lithuania</li> <li>b) Liberia</li> <li>c) <b>Italy</b></li> <li>d) Latvia</li> </ul>
---	---	--	--

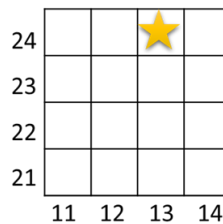


# Mapping

## Burnham-on-crouch



**Write a 4-figure-grid-reference for the locations written below:**



### How to find a grid reference

1. Find the star
2. Find which column it belongs to and record the number [For our example, the column we need is 13]
3. Find which row the star is in and record the number. [For our example, the row is 24]

<b>Creeksea Place:</b> <b>0304</b>	<b>The Oyster Smack Inn:</b> <b>1003</b>	<b>Ormiston Rivers Academy:</b> <b>0908</b>
<b>Burnham Primary School:</b> <b>1204</b>	<b>Burnt Mill Cottage:</b> <b>1010</b>	<b>Burnham Golf Club:</b> <b>0307</b>
<b>Tesco Express:</b> <b>1002</b>	<b>Co-op:</b> <b>1005</b>	<b>Riverside Park:</b> <b>0802</b>

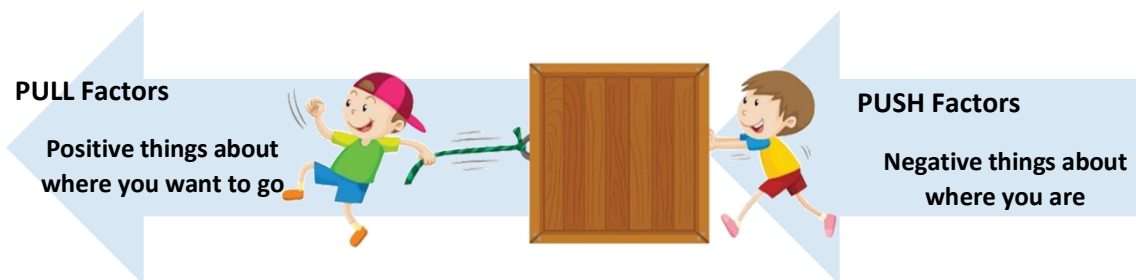




# Migration

## Why'd you move?

People move for a number of different reasons, we can put these reasons into two categories, PUSH and PULL factors:



Circle which statements are PULL and PUSH factors from the list below:

<i>"The climate is too hot; I can't plant anything."</i>	<b>PUSH</b> or <b>PULL</b>
<i>"The education system is outstanding."</i>	<b>PUSH</b> or <b>PULL</b>
<i>"The crime rate is very low here."</i>	<b>PUSH</b> or <b>PULL</b>
<i>"It's nice but there isn't any transport or shops here."</i>	<b>PUSH</b> or <b>PULL</b>
<i>"The weather is perfect here! Ideal for gardening."</i>	<b>PUSH</b> or <b>PULL</b>
<i>"It's okay, except there is a plague of locusts every June."</i>	<b>PUSH</b> or <b>PULL</b>
<i>"This is the cleanest place in England."</i>	<b>PUSH</b> or <b>PULL</b>
<i>"There's pollution here, it's sometimes hard to breathe."</i>	<b>PUSH</b> or <b>PULL</b>
<i>"It's so easy to get a job here."</i>	<b>PUSH</b> or <b>PULL</b>
<i>"The traffic is horrible here, it's so crowded and angry."</i>	<b>PUSH</b> or <b>PULL</b>



# Hazards

## Worse Case Scenarios

Hazards can be either **NATURAL**, like a volcano, or **ECOLOGICAL**, like a virus.

Can you divide these 3 news headlines into NATURAL or ECOLOGICAL hazards?

3.2 magnitude earthquake reported between Midland and Odessa

**NATURAL** or ECOLOGICAL

Two quakes hit Rohtak within 60 minutes; tremors felt in Delhi-NCR

**NATURAL** or ECOLOGICAL

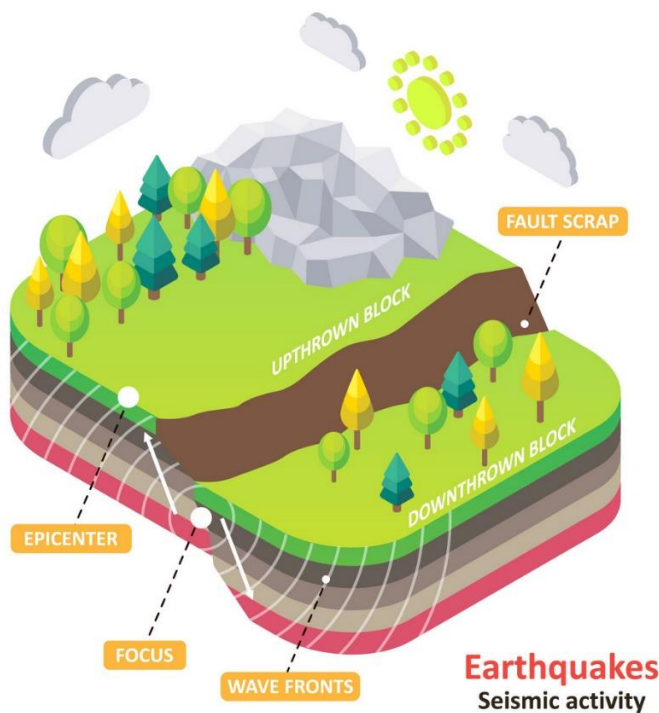
Coronavirus Live Updates: Infections Spike and Wane Unevenly Across the U.S.

NATURAL or **ECOLOGICAL**

Which term best defines the coronavirus?

- a) Natural Hazard
- b) Bat-spread virus
- c) Ecological Hazard
- d) Transatlantic flu

Based on the below diagram, circle if each statement is true or false



Earthquakes occur along a fault line

**TRUE** or **FALSE**

An earthquake weakens as you move away from the epicentre

**TRUE** or **FALSE**

Upthrown blocks are not as affected as downthrown blocks

**TRUE** or **FALSE**

Earthquakes move the land aggressively

**TRUE** or **FALSE**

Earthquakes can only occur during the day when the sun is out

**TRUE** or **FALSE**